

KENDRIYA VIDYALAYA, IIM LUCKNOW

HALF YEARLY EXAM, 2019-20

CLASS-V

TIME: - 2 ½ HOURS

SUBJECT: - EVS

M.M.: - 80

Name: - Date: -

Section: - Invigilator's Sign: -

Roll No.: - Examiner's Sign: -

GRADE-SHEET

COMPETENCIES	OBSERVATION	IDENTIFICATION	DISCOVERING FACTS	TOTAL
GRADE				

Remarks of Examiner: -

.....

HALF YEARLY EXAM, 2019-20

CLASS-V

TIME: - 2 ½ HOURS

SUBJECT: - EVS

M.M.: - 80

Name: - Date: -

Section: - Invigilator's Sign: -

Roll No.: - Examiner's Sign: -

GRADE-SHEET

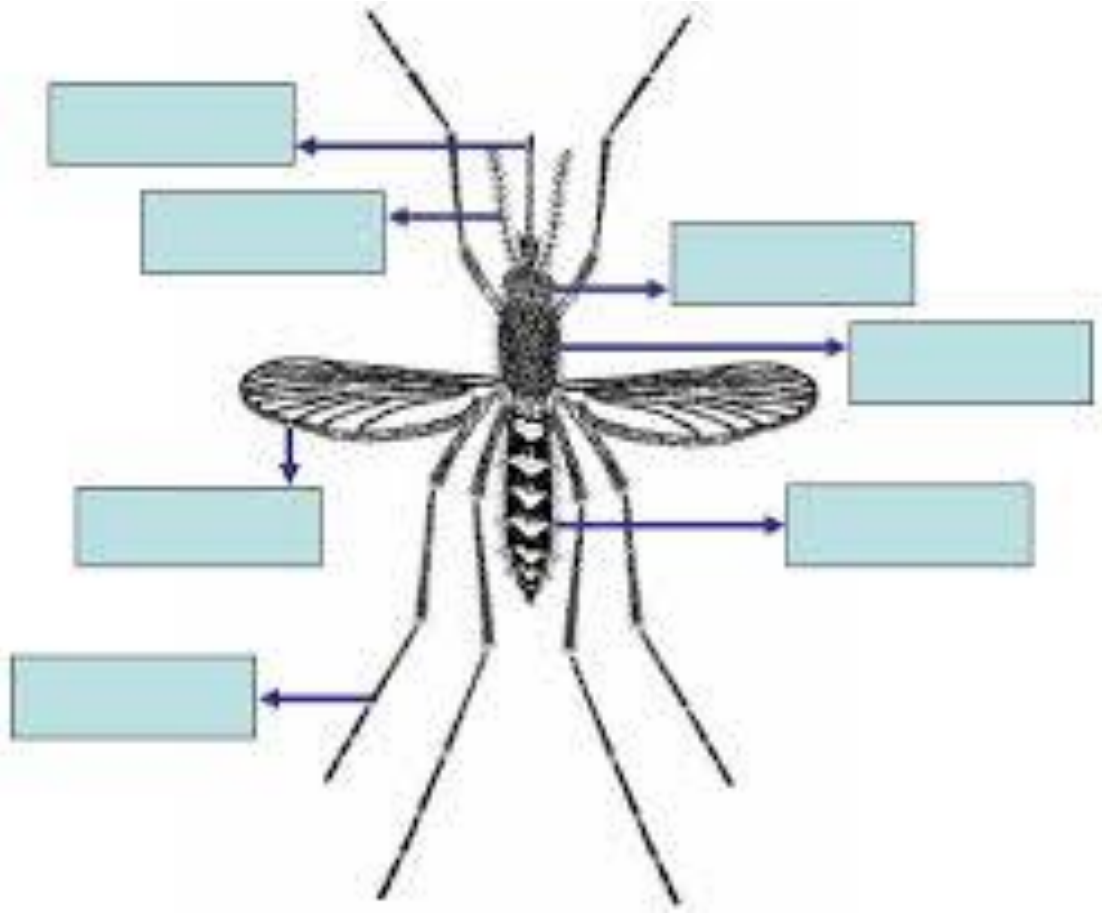
COMPETENCIES	OBSERVATION	IDENTIFICATION	DISCOVERING FACTS	TOTAL
	30	25	25	80
MARKS				
GRADE				

(Sign of Checker)






(Sign of Examiner)

OBSERVATION

VSA: I. Label any five body parts of a Mosquito: -

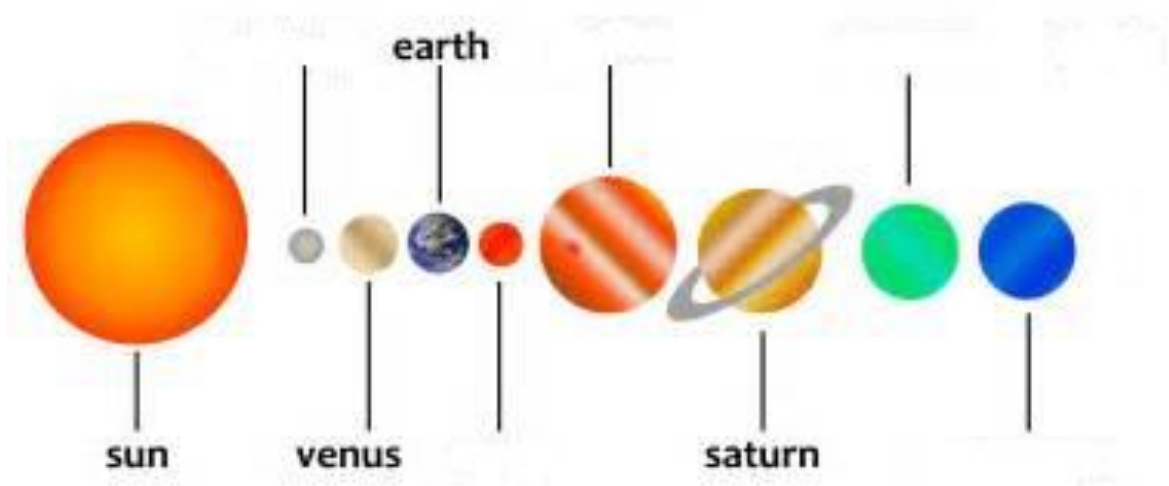


VSA: II. Identify the famous astronauts, scientists, mountaineers: -

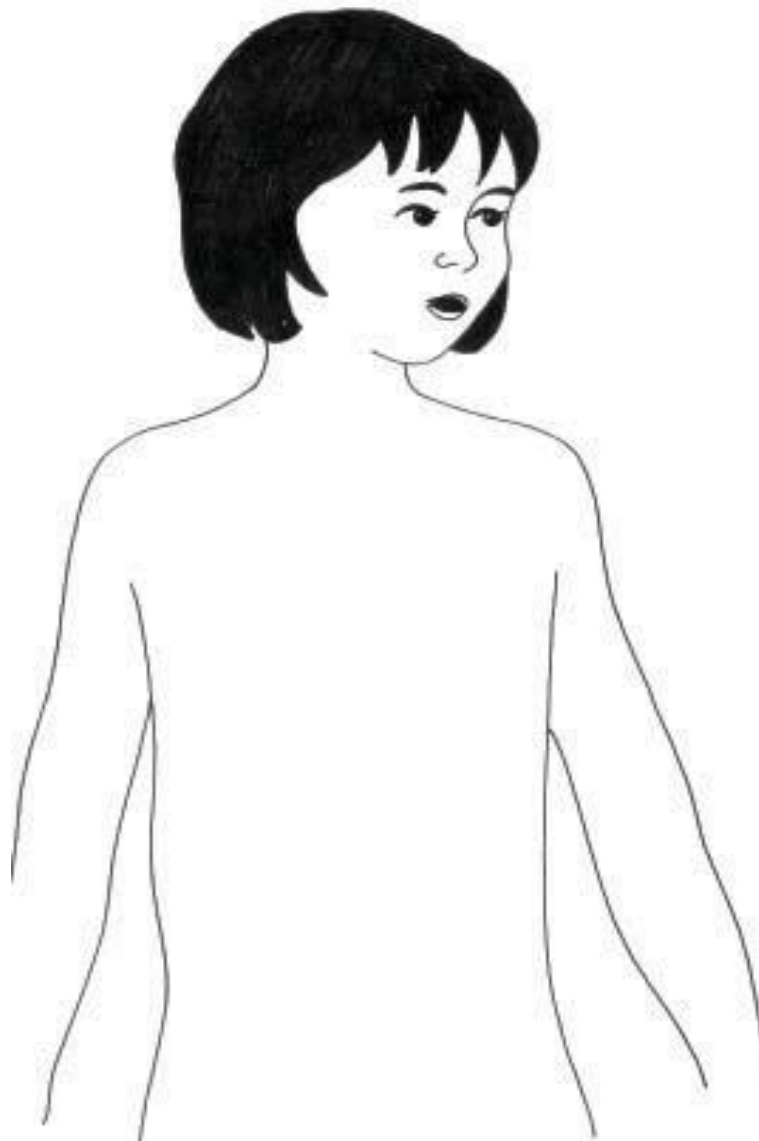
		
		

SA:

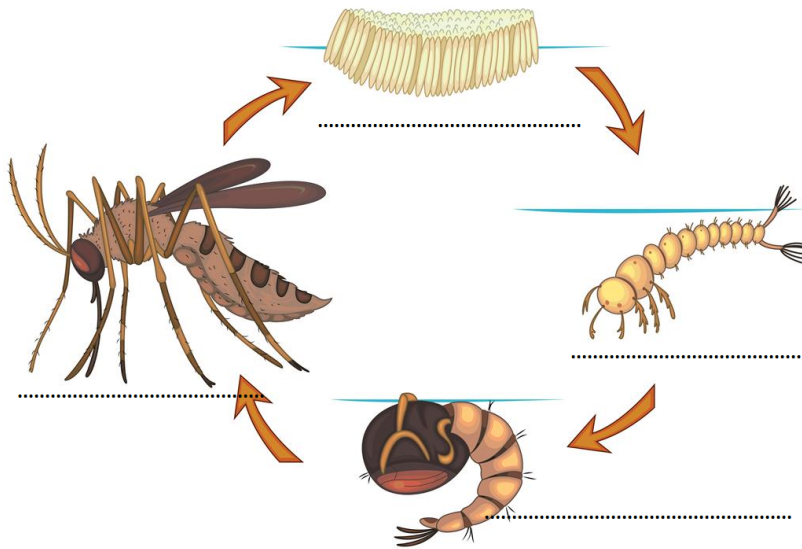
Q-(1) Name the planets in order from the sun-



Q-(2) Draw the digestive system in our body and label the parts: -



Q-(3) Name the phases of Life-Cycle of a mosquito: -



Q-(4) Why do objects float?

Ans: -
.....
.....



Q-(5) Why do people float in the Dead-sea?

Ans: -
.....
.....



LA: -


Q-(1) How can you protect yourself from mosquitoes? Write at least five measures steps: -(5)



Ans: -
.....
.....
.....
.....
.....
.....
.....
.....

Q-(2) Explain in detail how Mamidi Tandra (Aam Papad) is prepared:

Ingredients: -.....



METHOD: -

.....
.....
.....
.....
.....
.....
.....
.....
.....

IDENTIFICATION

VSA: -

I. Identify the following pictures and Sources of water: - (5)



.....



.....



.....



M.....



M.....

II. Identify the following historical monuments of India: -(5)



T.....



Q.....



R.....



H.....



C.....

SA: -

Q-(1) Write the names of some food items that can be made using raw unripe Mangoes.



Ans: -

Q-(2) What are the following animals killed for: -



(i) Elephants-

(ii) Tigers-

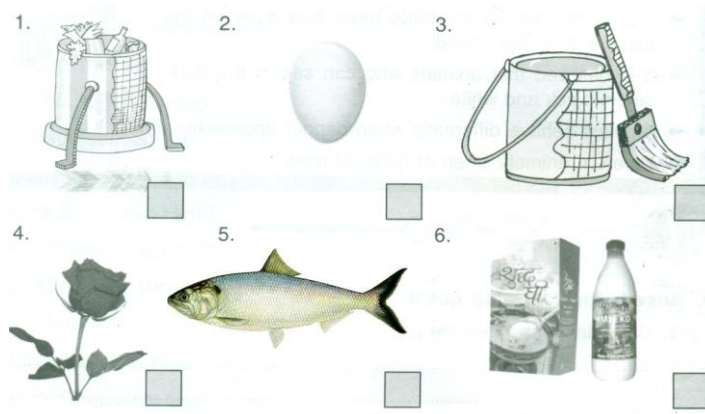


(iii) Musk Deer-

(iv) Snakes-



Q-(3) Tick mark (✓) the ones you think smell good and cross (X) the ones you think smell bad: -



Q-(4) Name four food items which are Indian origin: -



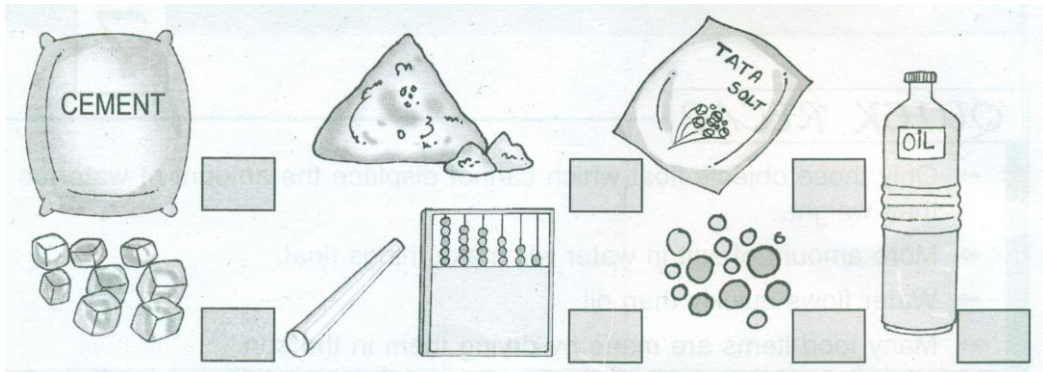
(i)

(ii)

(iii)

(iv)

Q-(5) Tick mark (✓) the objects which will dissolve in water and cross (X) out the ones which will not dissolve in water: -



LA: - Look at the Golconda fort map and answer the following-



Q-(1) If you are peeping inside from Bodli Darwaza, in which direction from you is Katora Hauz?

Ans: -

Q-(2) If someone is entering from Banjara Darwaza, in which direction from her is Katora Hauz?

Ans: -

Q-(3) In which direction will you walk from Bala Hisar to reach Moti Mahal?

Ans: -

Q-(4) How many gates can you see on the outer walls of the fort?

Ans: -

Q-(5) Count how many palaces are there in the fort?

Ans: -

DISCOVERING FACTS


VSA: -

I. Fill in the blanks: -

Dandi Been Smell Flies Glucose

- (1) Ants leave some on the ground.
- (2) Snakes dance when the is played.
- (3) A drip is given for instant energy.
- (4) spread Cholera & Diarrhoea.
- (5) Gandhiji undertook a march in 1930.

II. Write the sleeping time of each animal: -



Cow _____



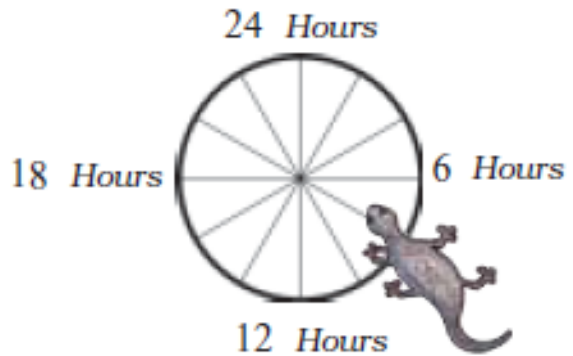
Python _____



Giraffe _____



Cat _____



Lizard (IN WINTERS).....

SA: -

Q-(1) List any two responsibilities of a group leader while mountaineering: -


Ans: -(1)

(2)

Q-(2) Draw any two food items which are from Foreign origin: -

--	--

Q-(3) Draw the picture of tongue and label the taste-buds: -




Q-(4) List some items which should be present in the rucksack while mountaineering: -



Ans: -

.....

Q-(5) List some endangered animals: -

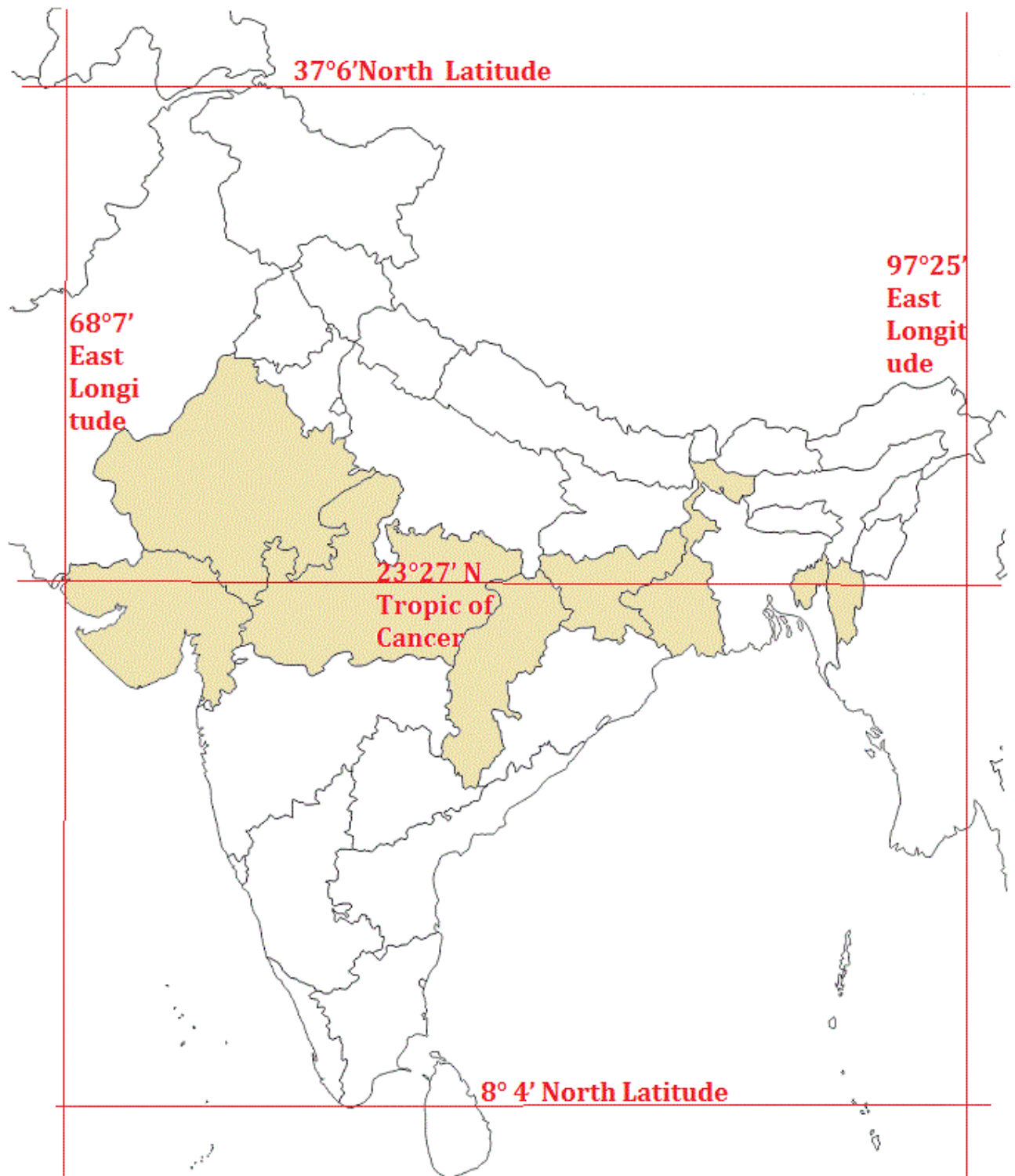


Ans: -

.....

LA: -

Q-(1) Locate the neighbouring countries of India: -



OR

