



KENDRIYA VIDYALAYA IIM LUCKNOW

SESSION ENDING EXAM 2019-20

Class: III

Section: _____

Subject: EVS

Time: 2:30 Hours

Date : _____

Name of the Student: _____

Roll No:

--	--	--	--

Competencies	Observation and Reporting	Identification and classification	Discovery of Facts	Overall
VALUE POINTS	30	25	25	80
VALUE POINTS OBTAINED				


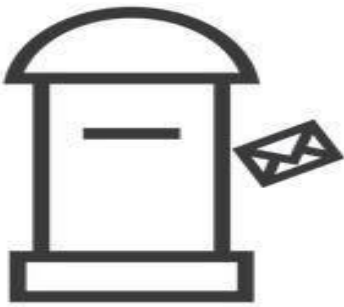
Signature of the Invigilator

Signature of the Evaluator

Observation and Reporting

1. Observe the pictures and write their names: -

VSA





Q 2. Name the following sports persons and write names of games they are associated with.



Name:

Game:



Name:

Game:

Q 3.

a) Name the bird given in the picture:

b) Why do we keep it?

.....

.....



Q 4. How were letters sent in old days? Who collects letters from the post box?

Q5. Write the names of two animals.



That we can touch	That we cannot touch



Q 6. Name two games which are played with a ball.

1 _____ 2 _____



Q7. Observe the picture and answer the following questions.

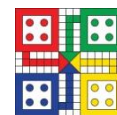
LA

- a) How many hand pumps are there in the map? _____
- b) How many trees are there in the map? _____
- c) What is near to the shop? _____
- d) Is the bus stop closer to the school or to the hospital? _____
- e) What is near the bus stop? _____

IDENTIFICATION & CLASSIFICATION

Q1. Fill in the blanks by choosing correct option:

a) _____ is an indoor game. (Ludo / Football)



b) The food item that we get from plant is _____ (curd / potato)



c) A _____ repairs cars and scooter. (blacksmith / mechanic)



d) We take _____ when we have toothache. (ajwain / clove)



e) We drop our letters in a (helpbox/ letterbox)



f) Major Dhyan Chand is related to (hockey / badminton)



g) Early men lived in (tents / caves)



h) Sloping roofs are found in areas.(hilly / plain)



i) Multi-storied buildings are found in (cities / villages)



j) Clove is of its plant. (flower / bud)



Q2. Name any two materials that are used in making Pucca house.

SA

Ans.....

Q 3.Name two games that are played indoor.

Ans.

Q4. What kinds of roofs are made in the hilly areas?

Ans.....








Q5. Suggest any two ways of saving water.

Ans.....
.....

Q6. What are three different types of families?

Ans.

Q7. Draw any five symbols that you have seen around you and write their meanings (LA)

	_____		_____
	_____		_____
	_____		

DISCOVERY OF FACTS

Q1. A) Fill in the blanks by choosing correct option: -

VSA

- a) Clayey soil is found near a (pond / house)
- b) Cauliflower is the of its plant.(leaf / flower)
- c) Pots are given different shapes using a(trowler / potter's wheel)
- d) brings letters for us. (nurse /postman)
- e) A potter needsand water to make a pot. (cotton / clay)

B) Observe the following statements and mark as true or false:

- a) A potter needs potter's wheel to shape the pots. :.....
- b) Clayey pots are baked in fire. :.....
- c) When we get hurt, we drink turmeric with milk. :.....
- d) All food items are cooked before eating. :.....
- e) In old days letters were sent with the help of crows. :.....

Q 2. What does a potter need to make pot?

.....
.....



Q 3. Draw your Family tree: -



Q 4. Name the plant which is useful in: -

Cough and cold

Toothache



Q5. Encircle the odd one.

- a) *Honey* *Meat* *Egg* *Banana*
- b) *Cabbage* *Curd* *Carrot* *Onion*

