









	KENDRIYA VIDYALAYA IIM LUCKNOW			
	SESSION ENDING EXAM 2019-20			
	Class: V		Section: _____	
	Subject: EVS	Time: 2:30 Hours	Date : _____	
Name of the Student: _____			Roll No:	
Competencies	Observation and Reporting	Identification and classification	Discovery of Facts	Overall
Value points	30	25	25	80
Value points obtained				
<i>Signature of the Invigilator</i>		<i>Signature of the Evaluator</i>		

OBSERVATION& REPORTING

VSA- (10x1=10)

Q-(1) Observe the picture and write their names and one sentence about each: -

	<p>(1)</p> <p>.....</p> <p>.....</p>
	<p>(2)</p> <p>.....</p> <p>.....</p>
	<p>(3)</p> <p>.....</p> <p>.....</p>
	<p>(4)</p> <p>.....</p> <p>.....</p>

	(5)
	(6)
	(7)
	(8)
	(9)
	(10)

SA: - (5x2=10)

1. What should we do if an earthquake occurs?



Ans: -
.....
.....

2. Name any four Petroleum products and its use.



Ans: -
.....
.....

3. Write any two situations when we blow air: -



Ans: -
.....

4. What is Lekha?

Ans: -
.....



5. What is Undhiya? How is it cooked?

Ans: -
.....
.....
.....



LA-(1X5=5)

12. Describe the journey how the Bajra rotis reach from field to your plates?

				
1	2	3	4	5
				
6	7	8	9	

Ans: (1)

(2)

(3)

(4)

(5)


(6)

(7)

(8)

(9)

12. Look at this picture & answer the questions given below: -



(i) What are the different kinds of work being done in this drawing?
List some of these. (1)

Ans: -
.....
.....

(ii) If you were asked to do any five jobs shown in this picture, which
would you choose? Why? (2)

Ans: -
.....
.....

(iii) Which five jobs would you not choose? Why? (2)

Ans: -
.....
.....

IDENTIFICATION & CLASSIFICATION

VSA: - (10X1=10)

Q-(1) Identify any five Indian Women players: -



Ans: -



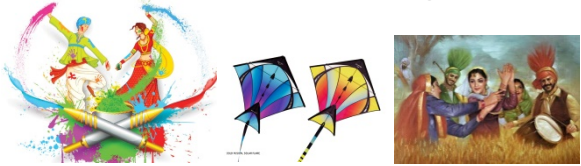


Q-(2) Rearrange the jumbled letters for find Natural Calamity: - (Any five)



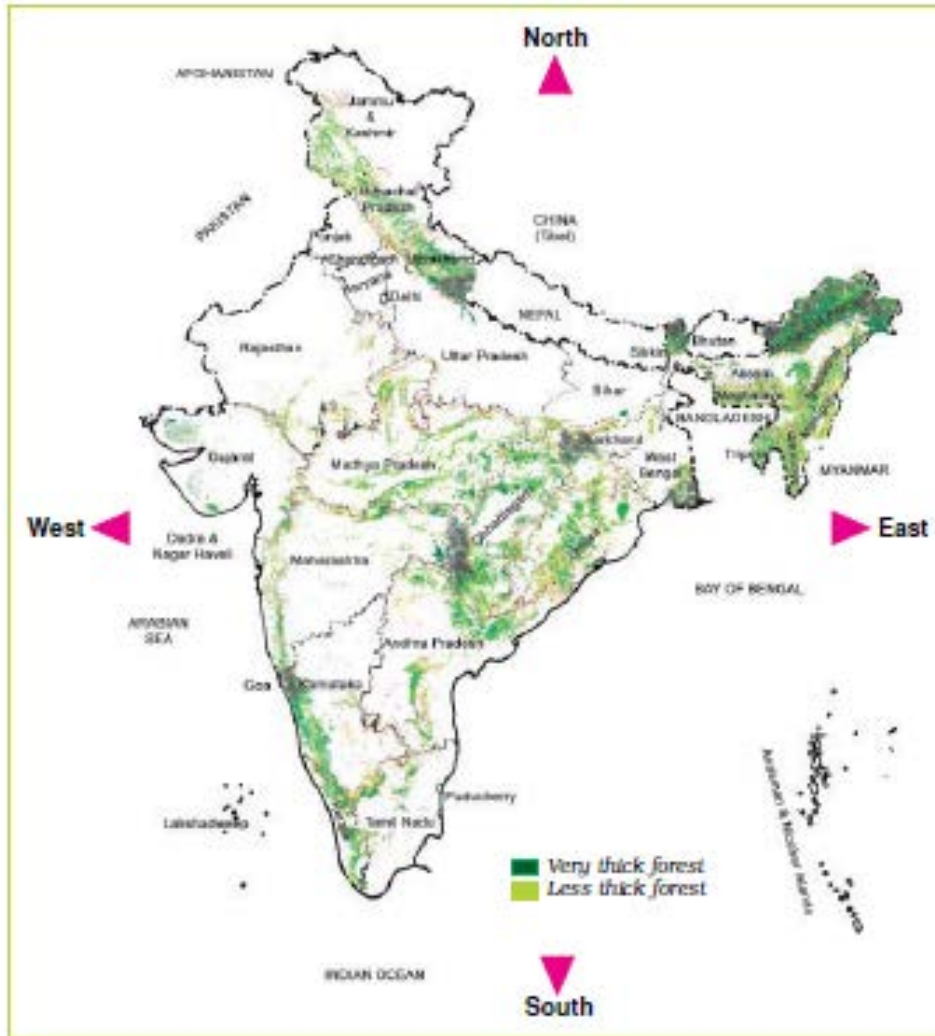
NMAFIE
TGORDUH
DOOLF
THREAQEUAK
SUMITNA
NOCAVOL

SA: - (5X2=10)

Q-(3) Give two examples of the each of the following: -

<p style="text-align: center;">Dams in India</p> 	<p>(1)</p> <p>(2)</p>
<p style="text-align: center;">Alternative fuels</p> 	<p>(1)</p> <p>(2)</p>
<p style="text-align: center;">Festivals related to agriculture</p> 	<p>(1)</p> <p>(2)</p>
<p style="text-align: center;">Inherited diseases</p> 	<p>(1)</p> <p>(2)</p>
<p style="text-align: center;">Wind musical instruments</p> 	<p>(1)</p> <p>(2)</p>

LA: - (5)- 11. Study the map of India and answer the questions: -



(i) What is all shown in the map?

Ans: -

(ii) Which states are having very thick forest coverage?

Ans: -

(iii) Which states are having less thick forest coverage?

Ans: -

(iv) Which states are having no forest area?

Ans: -

(v) Why the North-Eastern states have very thick forest?

Ans: -

DISCOVERING FACTS

VSA: - (10X1=10)- Answer the questions as directed: - (Any five)

1. Write 'TRUE' or 'FALSE': -

(a) On 26th January, an earthquake struck the Kutch area of Gujarat.

[]

(b) Personal Loan is for buying a car.

[]

(c) Polio is caused by a virus.

[]

(d) Pashmina Shawl is 10 times thinner yet very warm.

[]

(e) Oil Refineries are located in Mathura & Barauni.

[]

(f) Dr. B.R. Ambedkar was popularly known as Bapu.

[]

(g) Carom and Chess are Indoor games.

[]

2. Write single word for the following: - (Any five)

flood, genes, Hot, Jammu & Kashmir, 1400, stethoscope, Rebo

(a) The instrument used to measure the heart beat rate.....

(b) The house of Changpas is called.....

(c) The factor which is responsible for the similarities between family members.....

(d) air is light and rises.

(e) Dal and Buller Lakes are situated in

(f) Mumbai is km. away from Delhi.

(g) Excessive rainfall can lead to

(SA: - (5X2=10))

1. Answer the following questions as directed: -

(a) Write any two causes of deforestation-

Ans: - (1)

(2)



(b) Name two social problems of our society-

Ans: - (1)

(2)



(c) Write two negative effects of dam construction-

Ans: - (1)

(2)



(d) Suggest two ways to save petrol-

Ans: - (1)

(2)



(e) Why is CNG better than petrol? Give reasons-

Ans: - (1)

(2)



LA: - (5)

**1. "The forest is like our Collective Bank". How? Describe it.
OR
What is Jhoom farming? Write in details.**

Ans: -

.....

.....

.....

.....

.....

.....

.....

.....

.....

.....

.....

.....

.....

