



KENDRIYA VIDYALAYA, IIM LUCKNOW

CCE CYCLE-7 SESSION 2019-20

Class: I

Subject: MATHS

Time: 90 Mins

NAME-

CLASS & SECTION-.....

ROLL NO-.....

DATE-.....

Competencies

Formation of Numbers

Understanding Basic concept

Problem Solving Ability

Overall

Grade

Signature of the Invigilator

Signature of the Evaluator

Formation of Numbers

1. Write the missing numerals:

21		23			26		28		30
31					36		38		
	42			45				49	

2. Write the numbers for the following number names :

a) Twenty Five = []

b) Twenty Eight = []

c) Thirty six = []

d) Thirty nine = []

e) Thirty seven = []

f) Forty five = []

g) Twenty = []

h) Fifty = []

i) Forty Eight = []

j) Thirty Five = []

Competency: Understanding basic concepts

1. Write what comes:

Before

_____ 21

_____ 20

_____ 19

_____ 18

_____ 17

After

27 _____

32 _____

39 _____

41 _____

49 _____

2. What comes between?

23 _____ 25

28 _____ 30

40 _____ 42

36 _____ 38

30 _____ 32

26 _____ 28

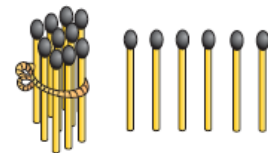
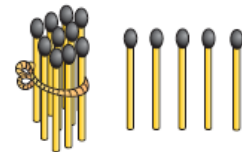
21 _____ 23

48 _____ 50

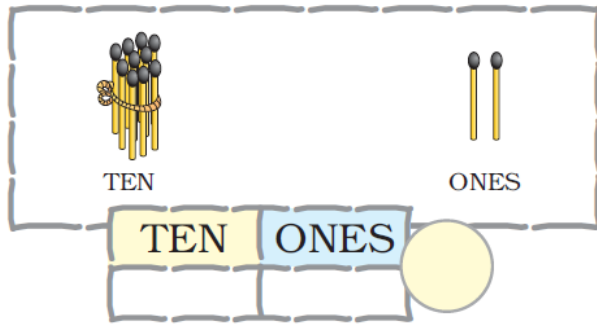
3. Fill in the blanks: -



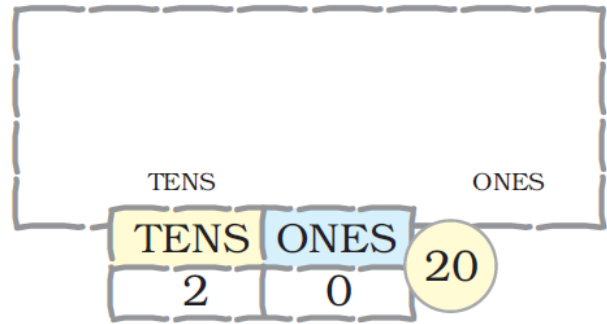
18



4. Write the number.



Draw the bundles and ones.



5. Write the numbers name

a. 28 _____

b. 40 _____

c. 38. _____

d. 50 _____

Problem solving Ability

1. Write numbers in increasing order.

A. 24 14 44 34

Ans, _____

b. 40 39 38 41

ans. _____


2. Arrange the numbers in descending order.

a. 40 20 30 50


ans. _____

b. 46 47 48 49

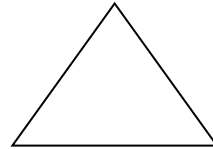
ans. _____




1. count and write the number of the following shapes in the given picture



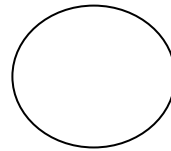
Squares = []



Triangles = []



Rectangle = []



Circles = []

2. Look at the picture carefully and answers. Name and draw the shape.

A. That occurs the most. _____

B. That occurs the least. _____